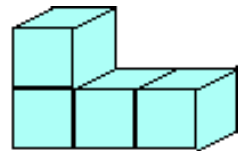
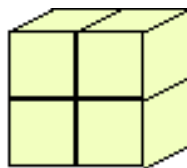
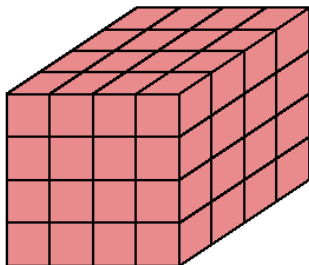
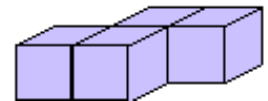
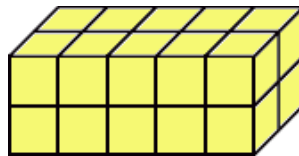
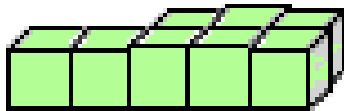
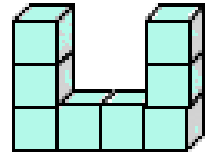
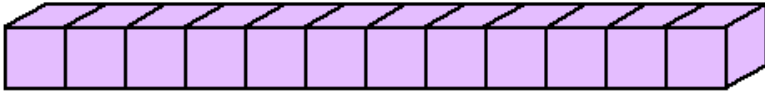


FIND VOLUME

Count the cubes and write the volume of each shape in cubic units.



A box has a volume of 20 cubic units. There are 5 rows with 2 cubes in each row. How many layers does the box have?

A box has a volume of 24 cubic units. There are 3 rows with 2 cubes in each row. How many layers does the box have?
