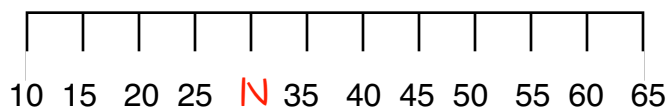


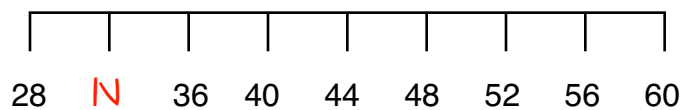


POINTS ON A NUMBER LINE

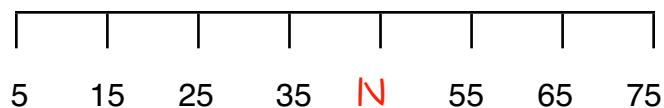
Find the number that point N represents on the number line.



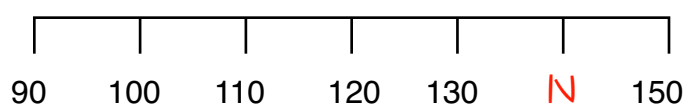
N = _____



N = _____

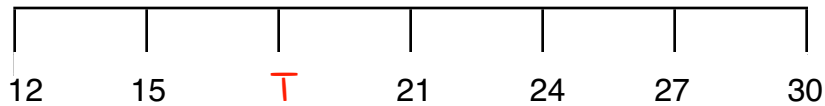


N = _____



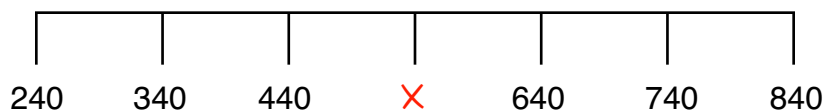
N = _____

Skip count by threes to find the number that point T represents on the number line.



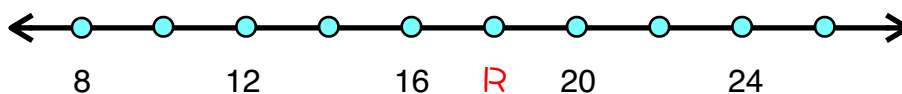
T = _____

Skip count by hundreds to find the number that point X represents on the number line.



X = _____

Circle the number that point R represents.



- a. 15 b. 18 c. 17 d. 19

