
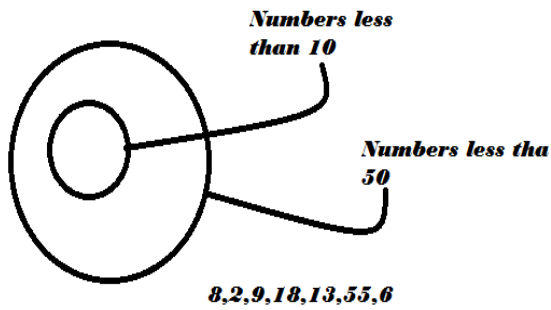
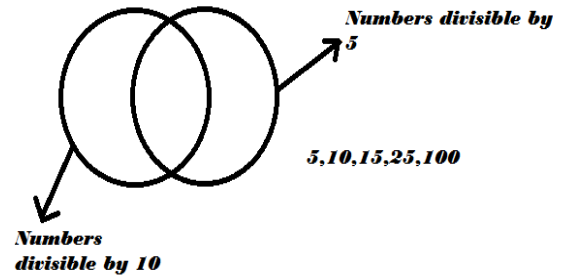
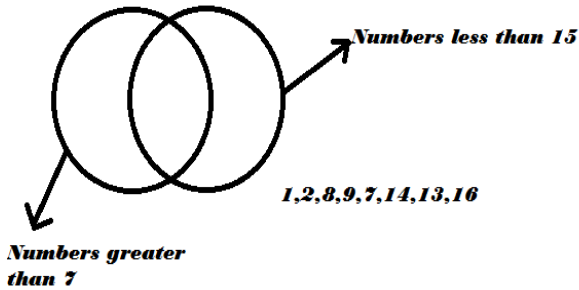
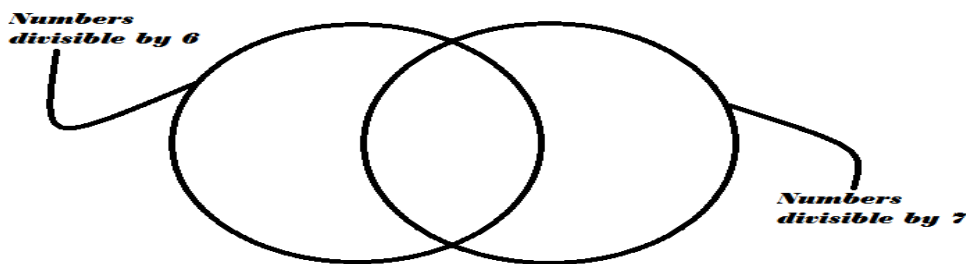


## Venn Diagrams - I

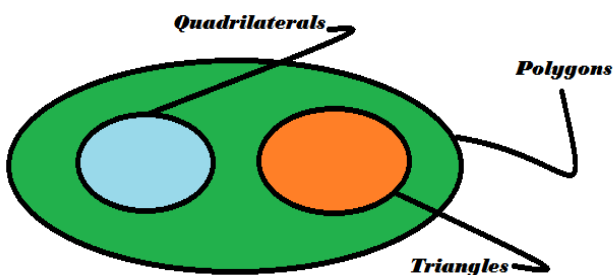
1. Place the numbers given with each picture in the Venn diagrams.



2. Place numbers 21, 36, 42, 56, 63, 77 and 84 in the correct regions of the following Venn diagram.



3. Using the Venn diagram answer the following questions.



- In which colored region do rhombuses lie?  
\_\_\_\_\_
- In which colored region do pentagons lie?  
\_\_\_\_\_
- In which colored region do equilateral triangles lie?  
\_\_\_\_\_
- Do circles lie anywhere in this Venn diagram?  
\_\_\_\_\_