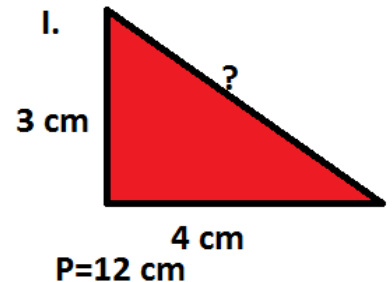
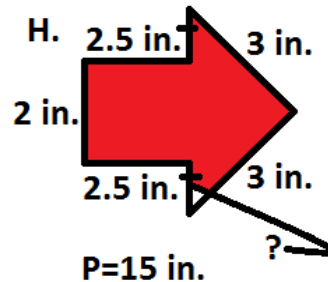
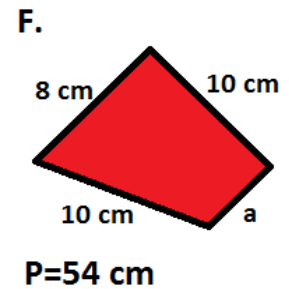
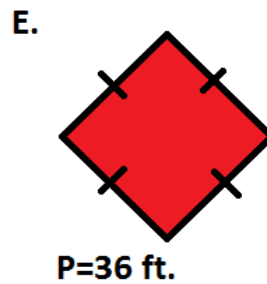
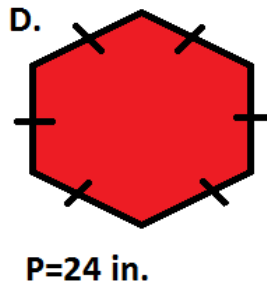
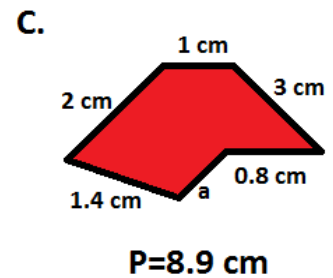
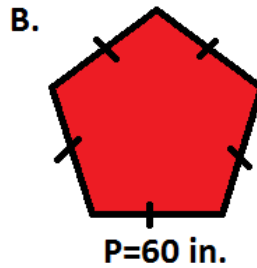
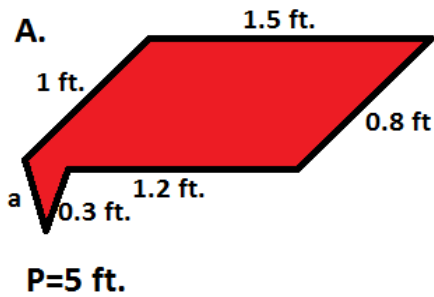


Perimeter and Missing Sides - II

1. A square has a perimeter of 64 in. What is the length of each side?

Solutions:

2. The perimeter of each of the shapes is provided below. Find the unknown length.



Solutions:

A.

B.

C.

D.

E.

F.

G.

H.

I.

3. Length of a side of a rectangle is 2 ft. and its perimeter is 6 ft. What is the width of the rectangle?

Solutions: